


2

MULTIPLICATION

White
Rose
Maths



1 Complete the sentences.




There are equal groups of
5 bananas.




There are equal groups of
 flowers.

2 Tick the group that is **not** equal to the others.



3



Complete the addition sentence to work out how many apples there are in total.

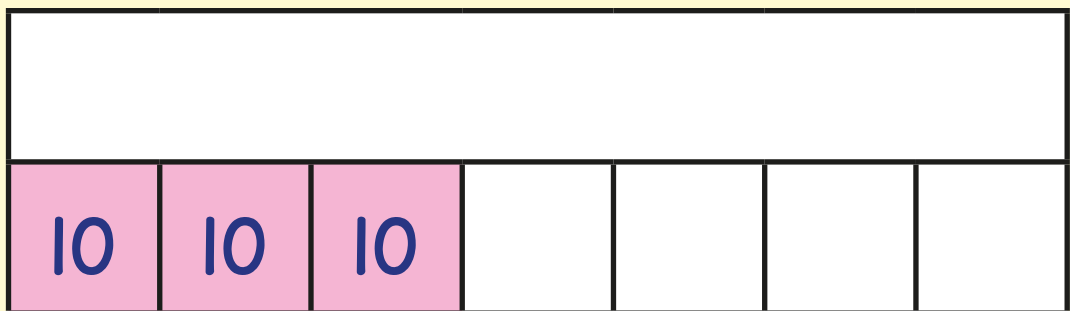
$$\boxed{4} + \boxed{} + \boxed{} + \boxed{} + \boxed{} = \boxed{}$$

Complete the multiplication sentence to work out how many apples there are in total.

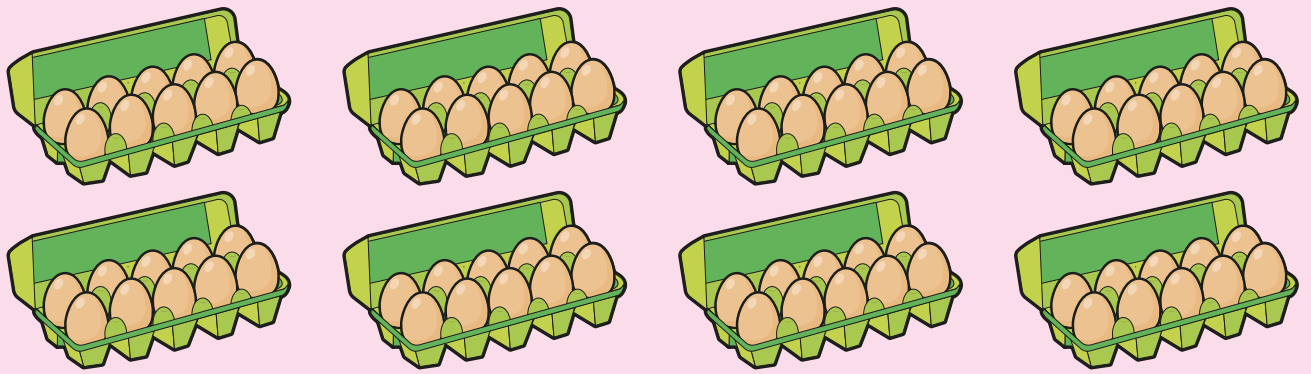
$$\boxed{} \times \boxed{4} = \boxed{}$$

4

Complete the bar model to show 7×10




- 5 Each box contains 10 eggs.



How many eggs are there altogether?

$$\square \times \square = \square$$

- 6 Jack makes an array with cubes.



Write **two** different number sentences using \times and $=$ to represent Jack's array.

7 Fill in the missing numbers.

$$0 \times 2 = \square$$

$$45 = \square \times 5$$


8 Kim has 6 of these coins.



She also has 8 of these coins.



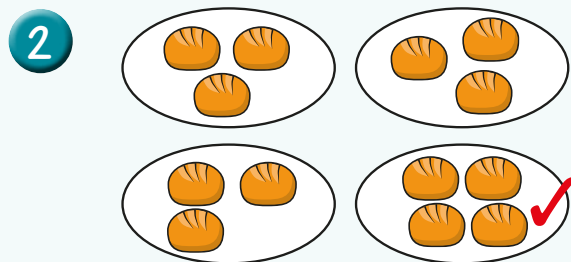
How much money does Kim have in total?



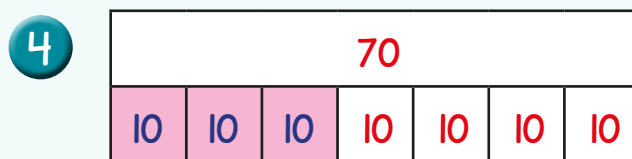
Answers



- 1 There are 4 equal groups of 5 bananas.
There are 5 equal groups of 2 flowers.



- 3 $4 + 4 + 4 + 4 + 4 = 20$
 $5 \times 4 = 20$



- 5 $8 \times 10 = 80$
There are 80 eggs altogether.

- 6 $3 \times 5 = 15$
 $5 \times 3 = 15$

- 7 $0 \times 2 = 0$
 $45 = 9 \times 5$

- 8 100 pence / £1

